

Sanghamitra School

Revision for Half Yearly Exam 2024-25

Class – III / Sec: Roll.No : Name :-----

Time: 2 Hours

Subject: English

Objective: To reinforce learning, improve retention and practice and apply knowledge.

Topics : Comprehension, Grammar- Common, Proper & Material Nouns,
Block-4 Spellings & Q&A

Note: Dear parent,

Kindly monitor your child to complete the given work and submit on 14.10.24.

SECTION - A

Q1. Read the paragraph and answer the questions. (Comprehension)

Young Artist

In a bustling city, there lived a talented young artist named Mia. Mia loved to paint colourful murals on the walls of her community. One day, she was given the opportunity to create a mural in a park. With her paintbrush in hand, Mia transformed a dull wall into a vibrant masterpiece. The mural brought smiles to the faces of everyone who passed by, spreading joy and inspiration throughout the city.



QA. What was Mia's talent?

Ans. _____

QB. Where did Mia have the chance to create the mural?

Ans. _____

QC. How did people react to the mural?

Ans. _____

QD. What is the title of the passage?

Ans. _____

Q2. Read the story and answer to the questions.

SLEEPING ON THE JOB



Aaron wanted to go for a walk. His dog, Toby, did not.
"Come on!" Aaron insisted. It's your job to take walks. It's my job to take you on walks."



Aaron put on Toby's harness and snapped on the leash. Toby just laid down. Aaron opened the front door, picked up Toby, and carried him outside to the grass. There, Toby laid down, rolled over, and showed Aaron his belly.

It's time for our walk!' Aaron insisted.

Toby just yawned, rolled over onto his side, and fell asleep. So Aaron sat down in the grass beside him.

"Oh well," Aaron said, laying down on his back next to Toby. "It is a nice day for an outdoor nap!"

- A. Toby is the name of the _____.
- B. Who insists Toby to go for a walk? _____
- C. Write any two naming words from the above story. _____, _____
- D. Does Toby wants to go for a walk? Say Yes or No. _____
- E. Whose job was to take Toby for a walk? _____

SECTION - B

Q3. SPELLING – Learn and write each word 3 times

- 1. Mole _____
- 2. Friendly _____
- 3. Greet _____
- 4. Politely _____
- 5. Thoughtful _____
- 6. Shy _____
- 7. Inactive _____
- 8. Invites _____

SECTION - C

Q4. Learn and write the answer 3 times.

QA. How are the 2 characters in the story different?

Ans. The Mole is thoughtful but shy and inactive as he never stepped out of his house. Where as the Rat is fun-loving and kind as he invites the Mole to go for a ride in his boat.

Ans.

Ans.

Ans.

SECTION - D

Grammar

Q1. Write Common Noun and Proper Noun in the table given below from the sentences.

1. In India, the cow is a sacred animal.
2. The teacher read a long story.
3. We went to Rose park to play cricket.
4. He jumped out of his chair.
5. She is going to Disneyland tomorrow.
6. Let's go for a walk in the park.

COMMON NOUN	PROPER NOUN

Q2. Underline the Material Noun in the sentences.

1. Seeta is wearing gold earrings.
2. Some coins are made of silver.
3. The petrol in the tank is leaking out.
4. He spread some honey on his bread.
5. The price of oil has risen sharply.
6. We need to put some air in the tyre.
7. He buys and sells leather goods.
8. We brought home two bags of rice.

THE END

Sanghamitra School

Revision for Half Yearly Exam 2024-25

Class/ Sec :

Roll.No :

Name : _____

Subject:Hindi

Time: 2 Hours

Objective: To reinforce learning, improve retention and practice and apply knowledge.

Note: Dear parent, Kindly monitor your child to complete the given work and submit on 14.10.24.

1. निम्नलिखित पठित गद्यांश को ध्यानपूर्वक पढ़कर नीचे दिए गए प्रश्नों के उत्तर लिखिए।

हमारे देश में हर साल 26 जनवरी यानी गणतंत्र दिवस के अवसर पर देश के उन चुने हुए बहादुर बच्चों को "राष्ट्रीय बाल वीरता पुरस्कार" दिया जाता है, जिन्होंने अपनी जान की परवाह न करते हुए दूसरों की जान बचाई हो। ऐसे बहादुर बच्चों का हमारे राष्ट्रपति स्वयं सम्मान करते हैं।

हर साल की तरह इस बार भी गणतंत्र दिवस के अवसर पर देशभर से चुने गए 22 वीर बच्चों को वीरता पुरस्कार दिया गया है।

1. हमारे देश में हर साल 26 जनवरी के दिन बहादुर बच्चों को क्या दिया जाता है?

उ.

2. गणतंत्र दिवस के अवसर पर बहादुर बच्चों का सम्मान कौन करते हैं?

उ.

3. गणतंत्र दिवस का अंग्रेजी शब्द क्या है?

उ.

4. पाठ के अनुसार कितने बहादुर बच्चों को राष्ट्रीय वीरता पुरस्कार दिया गया?

उ.

5. नीचे दिए गए शब्दों का वर्ण विच्छेद (Separate the characters) कीजिए।

1. जनवरी -

2. बहादुर -

II. नीचे दिए गए प्रश्नों के लिखिए।

1. राष्ट्रीय बाल वीरता पुरस्कार कब और क्यों दिया जाता है?

उ.

2. सरताज ने किसकी जान बचाई?

उ.

3. माँ कैसे गीत सिखाती है?

उ.

III. सही शब्द चुनकर खाली स्थान भरिए।

1. "राष्ट्रीय बाल वीरता पुरस्कार" ----- को दिया गया। (बच्चों , बूढ़ों)
2. आदित्य ----- की यात्रा करके लौट रहा था। (भूटान , नेपाल)
3. वेंकटेश ने ----- की अनोखी मिसाल दी है। (बहादुरी , कायरता)
4. वेंकटेश ----- की तेज़ धारा से भी नहीं डरा। (बिजली , पानी)
5. ----- लगाने से उसे टाँगों में गहरी चोटें आई थीं। (छल्लाँग , दाँव)

IV नीचे दिए गए शब्दों को सुंदर हस्तरेख में लिखिए।

1. राष्ट्रीय		
2. शक्तिशाली		
3. मूर्खता		
4. परिलोक		
5. भयानक		
6. जंगल		
7. पकीड़े		
8. होमवर्क		
9. स्वागत		
10. अहसास		
11. मूर्खता		

V. नीचे दी गई कविता की पंक्तियों को सुंदर हस्तलेख में लिखिए।

परीलोक की कथा कहानी

हँसकर मुझे सुनाती मम्मी,

फूलों वाले तितली वाले

गाने मुझे सिखाते मम्मी।

खीर बने या गरम पकौड़े

पहले मुझे खिलाती मम्मी,

होमवर्क पूरा कर लूँ तो

टॉफी केक दिलाती मम्मी।

VI. नीचे दिए गए शब्दों के अंग्रेजी अर्थ लिखिए।

1. परीलोक =

2. झूठ =

2. साहसिक =

4. अद्भुत =

6. तलाश =

6. भयानक =

7. श्रेष्ठ =

8. जंगल =

8. झटपट =

10. कहानी =



Sanghamitra School

Revision for Half-Yearly Exam (2024-25)

Class: III/____
Subject: Math

Time: 2 Hours
Name: _____

Objective: To reinforce learning, improve retention and practice, and apply knowledge.

Topics: Comparing 4-Digit Numbers, Adding 3-Digit Numbers, Subtracting 3-Digit Numbers and Multiplication Tables

Note: Dear Parent, kindly monitor your child to complete the given worksheet and submit it on **14.10.24**.

1. Spelling practice: Say and write each 3 times.

Multiplication	Product	Repeated Addition	Factors
Difference	Addends	Altogether	Subtraction

2. Solve using the column method.

A. $234 + 165$

B. $42 + 430 + 63$

3. Find the difference between:

A. 239 and 789

B. 670 and 932

C. 800 and 450

4. Fill in the blanks.

A. 5 more than 100 is _____.

B. 40 less than 90 is _____.

C. $98 + \underline{\quad} = 98$

D. $200 + 34 = \underline{\quad}$

5. Write the multiplication sentence.

A. $2 + 2 + 2 + 2 + 2 =$ _____

B. $12 + 12 =$ _____

C. $8 + 8 + 8 + 8 + 8 + 8 =$ _____

D. $11 + 11 + 11 + 11 =$ _____

6. Write the repeated addition sentence.





A. $2 \times 15 =$ _____

B. $5 \times 3 =$ _____

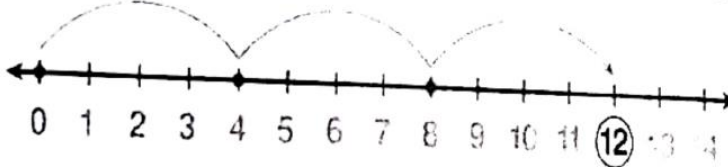
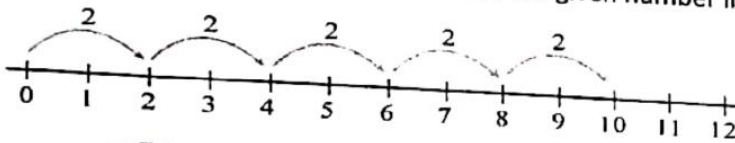
C. $3 \times 6 =$ _____

D. $4 \times 7 =$ _____

7. Write the multiplication sentence for the given pictures.



8. Write the multiplication sentence for the given number line.



9. Fill in the blanks.

A. $9 \times 0 =$ _____

B. $3 \times$ _____ $= 27$

C. _____ $\times 7 = 56$

D. $9 \times 5 =$ _____

E. 5 times 6 is _____.

F. 8 groups of 6 is _____.

G. If the cost of one pencil is Rs. 8 then the cost of 10 such pencils is _____.

H. If one bunch has 10 flowers then 10 bunches will have _____ flowers.

I. If one box has 5 laddus then 9 boxes will have _____ laddus.

J. Multiplication is repeated _____.

10. Arrange the following numbers from the smallest to largest.

A. 2111, 2010, 2011, 2101

B. 3916, 3910, 3009, 3010

11. Arrange the following numbers from the largest to smallest.

A. 5011, 4010, 4011, 5111

B. 6210, 6021, 6211, 6011

12. Fill the missing numbers.

A. 1050 1100 1150 _____ _____ _____

B. 4299 4300 4301 _____ _____ _____

13. Read the case study and answer the questions that follow. (Show your work)

On the occasion of Dussehra celebrations, 120 students participated in dance, 150 students participated singing, and 65 students participated in a Dussehra skit. Students enjoyed it thoroughly.

A. What is 65 more than 120?

B. How many more children participated in the dance than in the skit?

C. Find the total number of students who participated in the Dussehra celebrations.

D. Find the difference between 150 and 65.

E. 20 less than 120 is _____.

F. Difference between 120 and 150 is _____.



in

SHUBH
NAVRATRI

Solve the word problems.

1. A baker sold 235 loaves of bread in the first month and 560 loaves in the second month. How many loaves of bread did he sell in the two months?

2. A factory manufactured 950 toy cars. It sold 845 toy cars. How many toy cars were not sold?

3. Rishi bought 5 packs of 9 pencils each. How many pencils did he buy in total?

4. Sathwika arranged some flower pots in 8 rows of 5 pots each. How many pots did she arrange?

Sanghamitra School

Revision for Half Yearly Exam 2024-25

Class III/ Sec : Roll .No : __ Name : _____ Time: 2 Hours

Subject: Science

Objective: To reinforce learning, improve retention and practice and apply knowledge.

Note: Dear parent,

Kindly monitor your child to complete the given work and submit on 14.10.24.

Topics: Block-1 Parts of a plant ,2- Flowers, fruits and seeds,3- All about birds,4-All about insects.

I. Say, Learn and Write the spellings neatly.

Region			
Flight			
Nectar			
Mound			
Crawl			
Dragging			
Creepy-crawlies			
Thorax			
Life cycle			
Nymph			
Antennae			
Abdomen			
Pierce			
Detect			
Materials			
Larva			
Pupa			

Germ			
Decorative			
Reproductive part			

II. Copy the given paragraph neatly.

There are many things around us. Some are living and some are non-living. Some are natural and some are made by human beings. All animals, plants and human beings are living things. Things such as bat, ball, chair table, fan and van are non-living things. Things such as plants animals, sun, moon, water, rocks, air, etc., have been provided by nature. Thus, they are natural things.

III. Choose the correct option from the following:

1. How are birds different from insects? ()

- A. only birds can fly, insects cannot. B. only birds lay eggs, insects do not.
C. only birds have wings insects do not. D. only birds have feathers insects do not.

2. Why do birds build nests? ()

- A. To lay eggs B. to sleep at night
C. To decorate trees D. To store the food they catch.

3. How do feathers help a bird? ()

- P. to fly Q. to keep warm R. to attack their enemies
A. only P B. only P and Q C. only P and R D. All P Q and R

4. An eagle has curved hooked shape beak .It probably eat _____ ()

- A. grains and grass B. seeds C. flowers D. small animals

5. Shown here are some leaves. ()



Based on which of the following, can they be separated into different groups?

P. size Q. shape R. arrangement

A. only P B. only P and Q C. only Q and R D. all - P Q and R

6. Rohit visited his garden. Which of the following insects is he most likely to see on the flowers? ()

A. mosquito B. cockroach C. spider D. butterfly

7. Listed below are some organisms. Which of them can be considered to be an insect? ()



A. only earthworm B. only cockroach C. only cockroach and earthworm D. All the above

8. Which of these is true about the colour of leaves? ()

A. Leaves are never brown in colour B. Leaves are always green in colour
C. Leaves are always yellow in colour D. Leaves can be of different colours.

IV. Match the following:

1. Perching feet

A. Eagle

2. Straw like beak

B. Mosquito, fly

3. Insects

C. Sparrow, hen

4. Grasping feet

D. Humming bird

5. Make us sick

E. Have six legs

V. Answer the following:


Q1. Name any three insects.

A. _____

Q2. Name any three birds with their nests.

A. _____

Q3 Draw an insect and label its parts.



Q4. Why do we not eat castor seeds?

A. _____

VI. Read the given passage and answer the following:

Flowers are of various colours, sizes, and have a different number of petals. Some, such as the jasmine, have a nice smell, and some like hibiscus has no smell. Flowers are the reproductive part of the plants. They change into fruits. Most flowers change into fruits that contain one or more seeds. Seeds can grow into new plants.

1. Which is the reproductive part of the plant?

A. _____

2. Name the flower that has no smell.

A. _____

3. Which part of the plant can grow into a new plant?

A. _____

4. Which part of a plant have seeds in it?

A. _____